



Total No. of Printed Pages : 7+2 Map

Question Booklet Sl. No.

SOCIAL STUDIES
(English Version)

Time : 3 Hours 15 Minutes

Max. Marks : 100

Instructions :

- 1) In the duration of 3 hours 15 minutes, 15 minutes of time is allotted to read the question paper.
- 2) All answers shall be written in the answer booklet only.
- 3) Question paper consists of 4 Sections and 33 questions.
- 4) Internal choice is available in Section IV only.
- 5) Answers shall be written neatly and legibly.

SECTION - I

(12×1=12)

Note : 1) Answer all the questions.

2) Each question carries 1 mark.

1. In which hemisphere is India located on the basis of Latitudes ?
2. Odd one out :
Ganga, Brahmaputra, Godavari, Indus
3. Expand HDI.
4. Who wrote the book 'Silent Spring' ?
5. Find out the missed item.
Bay of Bengal - Andaman and Nicobar
? - Lakshadweep
6. Who called the 20th century as 'The Age of Extremes' ?

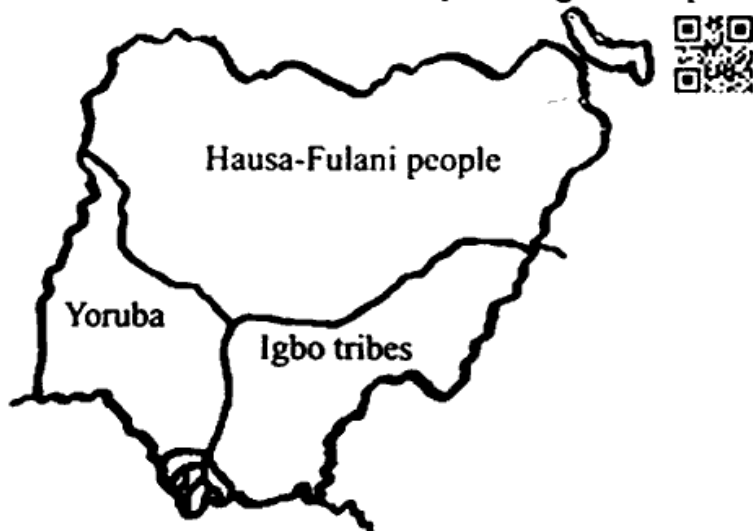
7. Name the country which suffered with the atomic attack in World War – II.
8. Identify the person shown in the given picture, who acted as the Chairman of the Constitutional Drafting Committee of India.



9. Who was considered as the father of Modern China ?
10. Name any two regional parties in India.
11. Which international organisation is connected to this Logo ?



12. What is the name of the country in the given map ?



SECTION – II**(8×2=16)**

Note : 1) Answer all the questions.

2) Each question carries 2 marks.

13. Name any four physiographic divisions of India.

14. Name the factors of production.

15. What is an Aerropolis ?

16. If any country takes an aggressive stance against another country, should the other country also respond aggressively ? Write your opinion.

17. Write two slogans on World Peace.

18. Name the present President and Vice President of India.

19. Arrange the following countries from West to East.

USA – JAPAN – ITALY – RUSSIA

20. Show the following information in a pie chart.

Share of employment in 1972-73

Agriculture	Industry	Service
74%	11%	15%

SECTION – III**(8×4=32)**

Note : 1) Answer all the questions.

2) Each question carries 4 marks.

21. What are the effects of great economic depression ?

22. Mention the uses of Lok Adalat.

23. The impact of globalisation is not uniform. Explain.

24. What are the problems faced by the migrants ?



25. Mention the various causes of two world wars.

26. Which human activities are contributing to Global Warming ?



27. Plot the information given below in a bar graph.

The Armaments Race

Year	Military Expenditure in Million Pounds
1880	132
1890	158
1900	205
1910	288
1914	394



28. Observe the map and answer the following questions.



1) Name any two tributaries of river Ganga.



2) On the bank of which river is Kolkata situated ?

SECTION – IV

(5×8=40)

Note : 1) Answer all the questions.

2) Each question carries 8 marks.

3) Each question has internal choice.

4) In question no. 33, both a) and b) (India map and World map) should be answered separately.

29. a) Explain the uses of Himalayas.

OR

b) Explain about the integration of Princely States into Indian Nation.

30. a) "The Ground Water laws are both outdated and inappropriate." – Explain.

OR

b) Explain about the basic principles of Indian Constitution.

31. a) Read the following paragraph and comment on it :

"Developed countries want developing countries to cut down on burning coal and other activities that add green house gasses to the atmosphere. Developing countries argue that developed countries developed precisely by burning fossil fuels in their development." <https://www.apboardonline.com>

OR

b) Read the following paragraph and comment on it.

"With the creation of a Muslim Nation, Pakistan, a painful and unimaginable situation arose before many people. Most Hindus living on one side of the newly drawn border became insecure and felt forced to leave. So did many Muslims living on the other side of this newly drawn border. Not all may have wanted this, not all may have understood why this was happening. They felt anger and hatred against each other for being forced to move out of their homes, villages and cities. Around 1.5 crore people, both Hindu and Muslim, were displaced. They killed, looted and burnt. Between two to five lakh people, both Muslim and Hindu, were killed. They became refugees, lived in relief camps, moved out on trains to find new homes. Gandhiji moved amongst riot hit people, in camps and hospitals, spreading the message of peace and brotherhood. This was not the freedom and Swaraj he had worked so hard to achieve. The Father of the Nation fasted and did not celebrate on the first Independence Day."

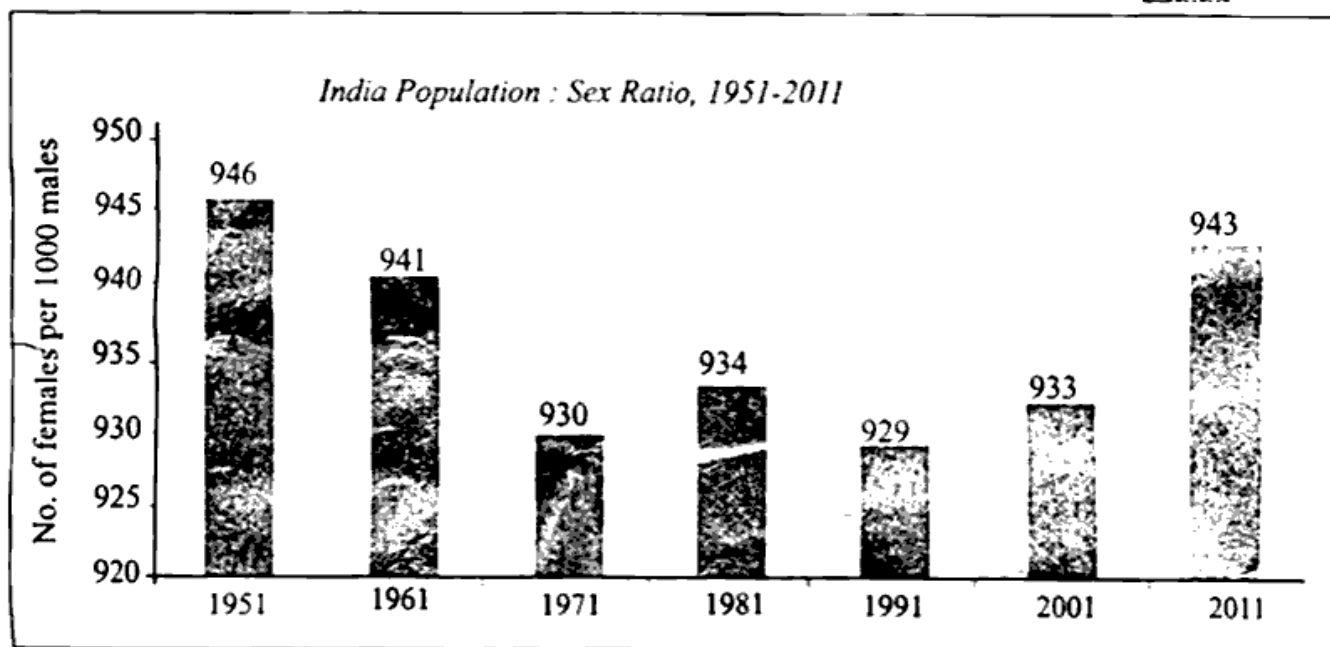
32. a) Based on the timeline, answer the following questions :

Proclamation of the Weimar Republic	November 9, 1918
Hitler becomes chancellor of Germany	January 30, 1933
Germany invades Poland, beginning of the Second World War	September 1, 1939
Germany invades the USSR	June 22, 1941
Mass murder of the Jews begins	June 23, 1941
The United States joins Second World War	December 8, 1941
Soviet troops liberate Auschwitz	January 27, 1945
Allied victory in Europe	May 8, 1945

- i) Which country was proclaimed as Weimar Republic ? Who became the Chancellor of that country ?
- ii) Name any two allied powers.
- iii) Who were murdered on a large scale by Nazis in Germany ? In which year these murders began ?
- iv) Which country joined lately in World War II ? In which year did this war end ?

OR

b) Observe the following bar graph and answer the following questions.




- i) What does the above graph say about ?
- ii) In which year the least sex ratio was recorded ?
- iii) What was the sex ratio of India as per 2011 census ?
- iv) What are the reasons for low sex ratio ?

33. a) Locate the following in the given outline map of India :

- 1) Mt. Everest 
- 2) Mumbai
- 3) Deccan Plateau
- 4) Aravali Ranges

OR

- 5) Delhi
- 6) Arunachal Pradesh
- 7) Vindhya Ranges
- 8) Coramandal Coast. 

b) Locate the following in the given outline map of World.

- 1) Mediterranean Sea
- 2) USA 
- 3) Italy
- 4) Nigeria

OR

- 5) Britain 
- 6) India
- 7) Japan 
- 8) Atlantic Ocean.