



21E & 22E

Total No. of Printed Pages - 8 + 2 Map

Question Booklet Sl. No.

SOCIAL STUDIES
(English Version)

Time : 3 Hours 15 Minutes

Max. Marks : 100

Instructions

- 1) In the duration of 3 hours 15 minutes, 15 minutes of time is allotted to read the question paper.
- 2) All answers shall be written in the answer booklet only.
- 3) Question Paper consists of 4 Sections and 33 Questions.
- 4) Internal choice is available in Section IV only.
- 5) Answers shall be written neatly and legibly.

SECTION - I

(12×1=12)

- Note :**
- 1) Answer all the questions.
 - 2) Each question carries 1 mark.

1. Which one of the following activities does not related to the primary sector ?
Agriculture, Fishing, Mining, Banking.
2. Expand UNDP
3. Into how many categories, in view of factors of production, the capital is divided ? What are they ?
4. Find the mis-match pair :

- | | | |
|---------------|---|------------|
| Konkan Coast | - | Goa |
| Malabar Coast | - | Kerala |
| Canara Coast | - | Karnataka |
| Circar Coast | - | Tamil Nadu |



5. Find out the missed item :
- | | |
|----------|---------------|
| Godavari | Bay of Bengal |
| Narmada | ? |
6. Name the Parliament of Japan.
7. Which US President announced the New Deal Policy ?
8. Observe the first pair and complete the second one :
Vietnam : French :: Nigeria : ?
9. Who played key role in the annexation of the Princely States in India ?
10. In which country the G-20 Summit was held in 2023 ?
11. Observe the table and answer the given question :

Contribution of Organised and Unorganised Sectors

Sector	Contribution (% of total)	
	Employment	Gross Domestic Product
Organised	8	50
Unorganised	92	50
Total	100	100

In which sector the large number of people are working?

12. Arrange the following countries from West to East :
India, Japan, England, USA.

SECTION - II

(8×2=16)

Note : 1) Answer **all** the questions.

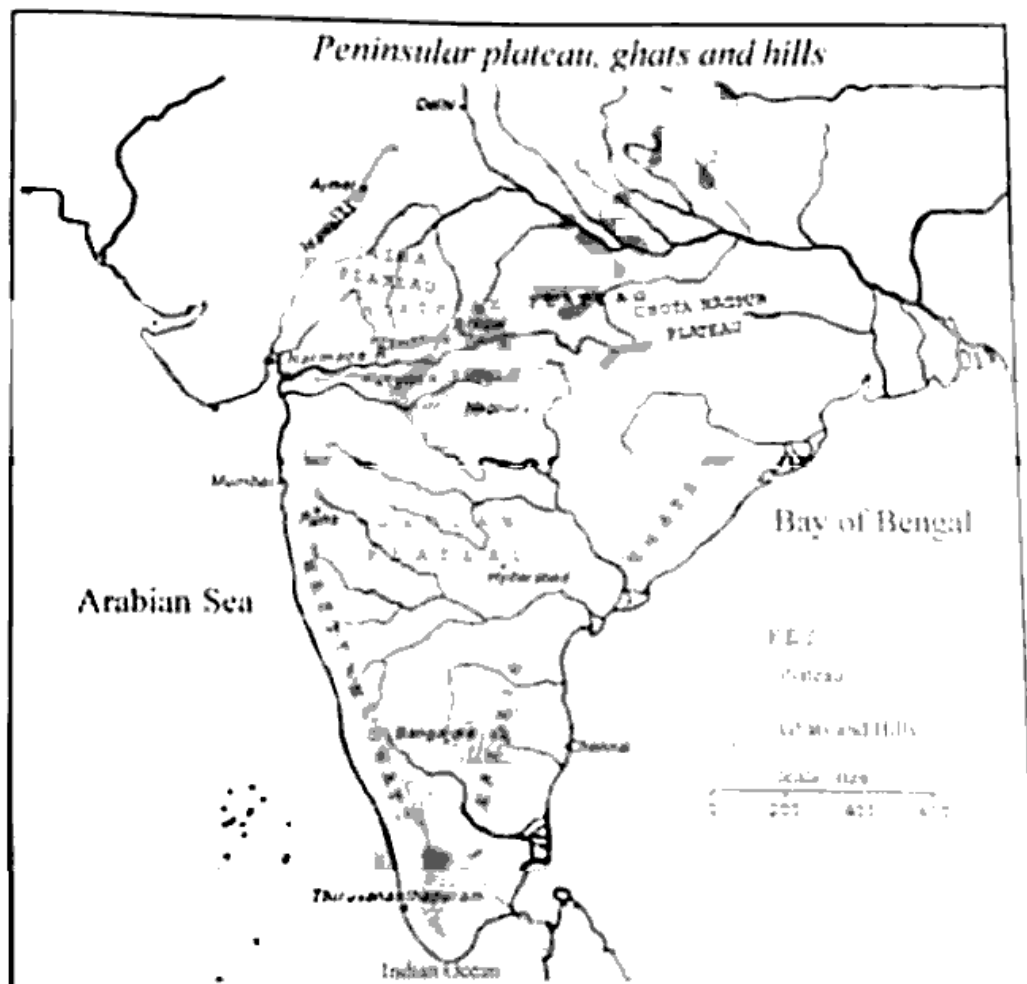
2) **Each** question carries 2 marks.

13. What is the difference between population growth and population change ?
14. Why do people migrate to urban areas ?
15. What is meant by 'sustainable development' ?
16. On which pole of the Moon, the Chandrayan - III was landed ? Which organisation launched it ?

17. Write two slogans on World Peace.
18. "Coalition Governments lead to policy paralysis" – Comment on it.
19. Plot the information given below on a bar graph :

Amendments of The Indian Constitution	
Year	Amendments
1951 – 60	7 times
1961 – 70	15 times
1971 – 80	22 times
1981 – 90	22 times

20. Observe the given map and answer the questions.



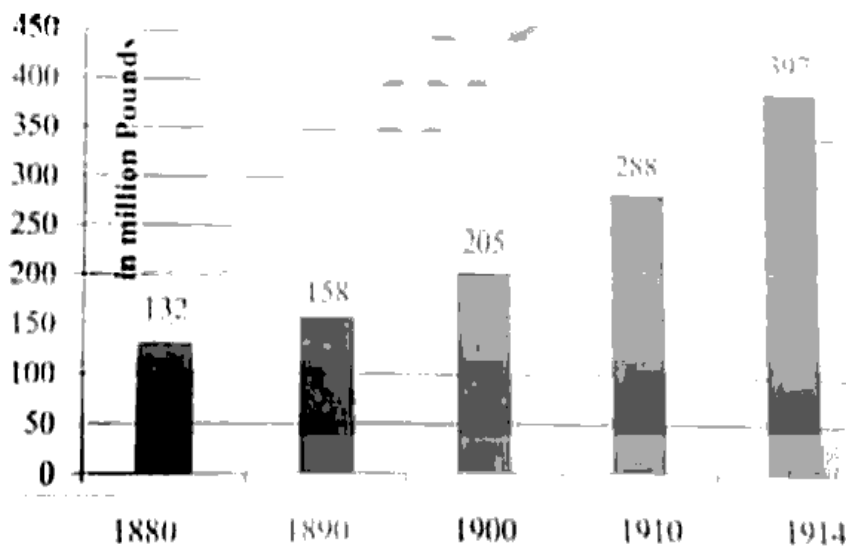
- A) Name the triangular shaped landform located in the South of India.
- B) Name any one west flowing river.



SECTION – III

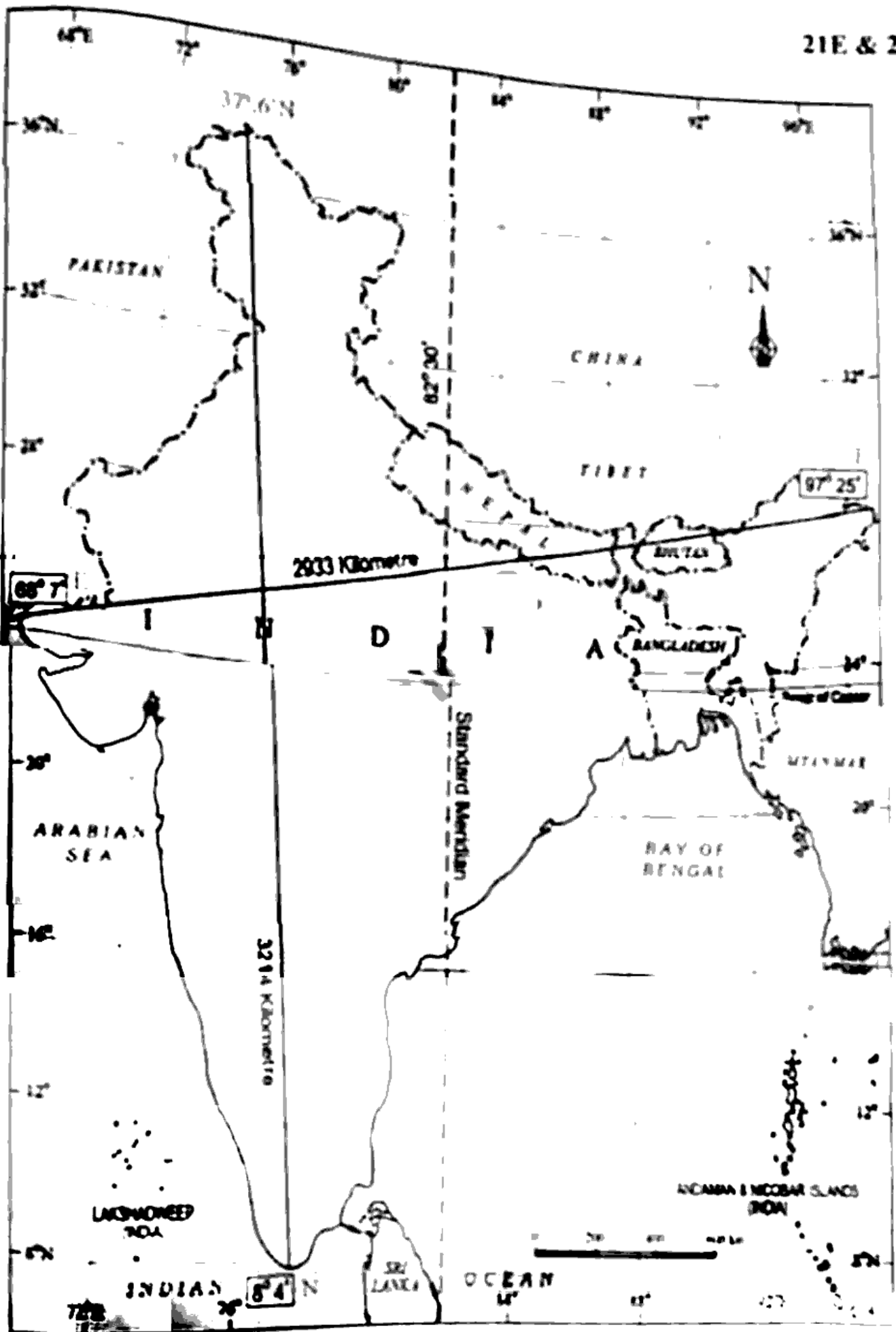
- Note : 1) Answer all the questions.
2) Each question carries 4 marks.

21. Write about Meira Paibi Movement.
22. Write a short note on the basic principles of Constitution.
23. Suggest some measures to lessen global warming.
24. How is PDS related to food security ?
25. How did partition of the country effect the lives of ordinary people ?
26. Appreciate the measures taken by the Election Commission to overcome the problem of illiteracy in the first general elections.
27. Plot the information in a tabular form given in the bar graph :



The Armaments Race

28. Observe the map and answer the questions :
 - a) Write any two neighbouring countries of India.
 - b) Which latitude is dividing India into two parts ?





SECTION – IV

- Note :**
- 1) Answer all the questions.
 - 2) Each question carries 8 marks.
 - 3) Each question has internal choice.
 - 4) In Question No. 33, both a) and b) (India map and World map) should be answered separately.

29. a) Differentiate between organised and unorganised sectors.

OR

b) Explain the role of UNO in preserving World Peace.

30. a) 'Indo Gangetic plains are densely populated' – Give reasons.

OR

b) 'World wars caused enormous loss' – What are the effects of world wars on the first half of the 20th Century?

31. a) Write a brief note on climatic controls.

OR

b) Explain the relations of India – Pakistan.

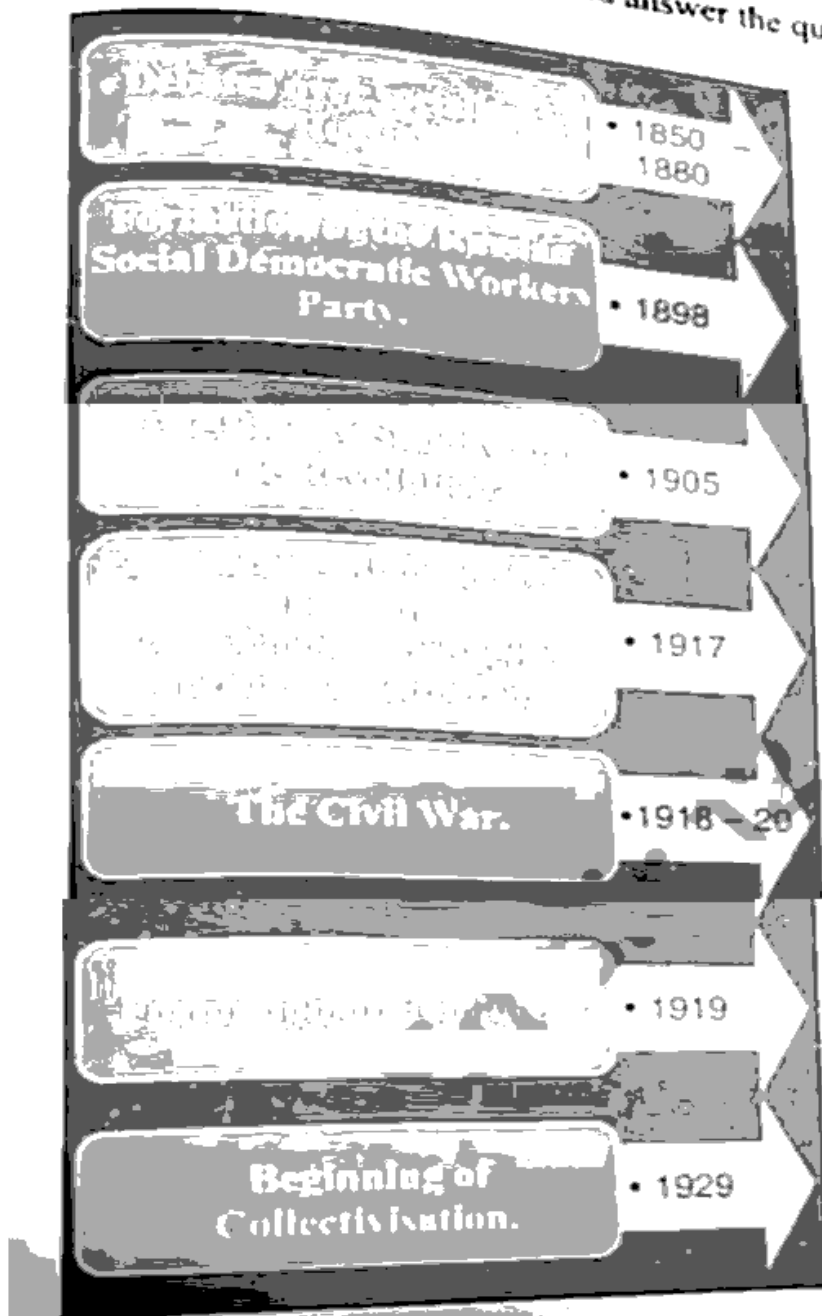
32. a) Write your observations on the given table :

Distribution of Workers in India, 2009 – 2010 (%)

Sector	Place of Residence		Sex		All workers
	Rural	Urban	Male	Female	
Agriculture Sector	68	8	47	69	53
Industry Sector	17	34	34	16	22
Services Sector	15	58	19	15	25
Total	100	100	100	100	100

OR

b) Observe the given time line chart and answer the questions :



- 1) In which year Comintern formed ?
- 2) In which year the Bloody Sunday took place ?
- 3) When did Civil War take place ?
- 4) In which year collectivisation began ?



33. a) Locate the following in the given outline map of India :

- 1) K2 peak**
- 2) Kolkata**
- 3) Chhota Nagapur Plateau**
- 4) Andaman and Nicobar Islands.**

OR

- 5) Circar Coast**
- 6) River Godavari**
- 7) Thar Desert**
- 8) Goa.**

b) Locate the following in the given outline map of world :

- 1) South Africa**
- 2) Indonesia**
- 3) Britain**
- 4) Brazil.**

OR

- 5) India**
- 6) Japan**
- 7) Canada**
- 8) Atlantic Ocean.**