

SOCIAL STUDIES, Paper-I & II
(English Version)

Time : 3 Hours 15 Mins.]

[Maximum Marks : 100

Instructions :

1. 15 minutes are allotted for reading the question paper in addition to 3.00 hours which are allotted for writing the answers.
2. All answers should be written in the separate answer booklet.
3. There are four sections in the question paper.
4. There is internal choice in Section – IV.
5. In Question No. 33, both A and B (India map and World map) should be answered separately.

Section – I

12 × 1 = 12

- Note :** (1) Answer *all* the questions.
(2) Each question carries 1 mark.

1. Give any two examples for service sector activities.
2. Identify the wrongly matched pair.
 - * Canara coast – Tamil Nadu
 - * Malabar coast – Kerala
 - * Utkal coast – Odisha
3. Mention any two human activities that cause Global warming.
4. Based on the relationship between the items in the first pair, fill up the blank in the second pair.

River Krishna : Mahabaleswar : : River Narmada : _____
--
5. What was the immediate cause for the World War II ?
6. Expand U.N.E.S.C.O.

7. Which of the following aspects was not associated to Jawaharlal Nehru ?
- * Formulation of Panchsheel Principles
 - * Playing a prominent role in Non Aligned Movement
 - * Nationalisation of banks
8. What two words were later added to the Preamble of the Constitution of India ?
9. Name the last British Viceroy for India.
10. What was the speciality of Andhra Pradesh in respect of the formation of linguistic states ?
11. Name any two states the Tropic of cancer passes through in India.
12. Based on the information given below, answer the question that follows :

State	Haryana	Punjab	Kerala
Sex Ratio	879	895	1034

Question : Which state has less discrimination towards women ?

Section – II

8 × 2 = 16

Note : (1) Answer *all* the questions.

(2) Each question carries **2** marks.

13. Differentiate between weather and climate.
14. What is Per Capita Income ? What is its limitation as a development measure ?
15. What is meant by 'economic liberalisation' ?
16. 'Coalition politics lead to unstable governments'. – Comment.
17. In commemoration of which event is India celebrating the Constitutional Day ?
18. Prepare any two slogans on World peace.

19. Show the information given below on a bar graph (rough).

Sector	Share of employment (1972-73)
Agriculture	74%
Services	15%

20. Arrange the following countries from East to West in respect of their location.

Japan, Spain, India, U.S.A.

Section – III

8 × 4 = 32

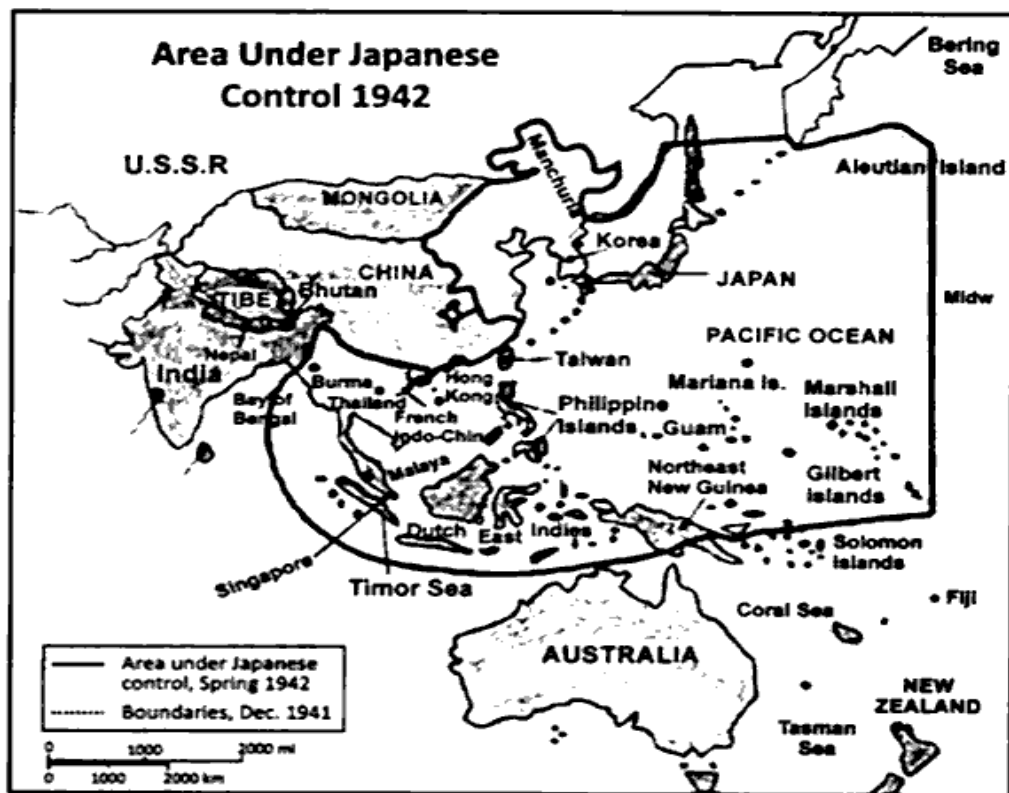
- Note :** (1) Answer all the questions.
(2) Each question carries 4 marks.

21. Mention any four aspects, that are shown by the census in India.
22. Why do most of the people wish to settle in organised sector ?
23. Explain the impact of globalisation on India.
24. Describe the conditions prevailed during the 'emergency period' in India.
25. Mention the constitutional provisions, which facilitate social change.
26. Why the historian Eric Hobsbawm called the 20th century 'The Age of Extremes' ?
27. Study the information given below and write your observations :

Distribution of Workers in India, 2009-2010 (%)

Sector	Place of Residence		Sex		All workers
	Rural	Urban	Male	Female	
Agriculture Sector	68	8	47	69	53
Industry Sector	17	34	34	16	22
Services Sector	15	58	19	15	25
Total	100	100	100	100	100

28. Based on the map given below, answer the questions that follow :



- (i) Name any two countries which were under Japanese control.
- (ii) What is the present name of 'Dutch East Indies' ?
- (iii) During which world war did Japan occupy these areas ?
- (iv) Name the smallest continent in the world.

Section – IV

5 × 8 = 40

Note : (1) Answer all the questions.

(2) Each question carries 8 marks.

29. Describe the monsoon mechanism in India.

OR

Explain the differences between Eastern Ghats and Western Ghats.

30. "There were the seeds of World War II in the treaty of World War I" – Do you agree with this statement ? Justify your answer.

OR

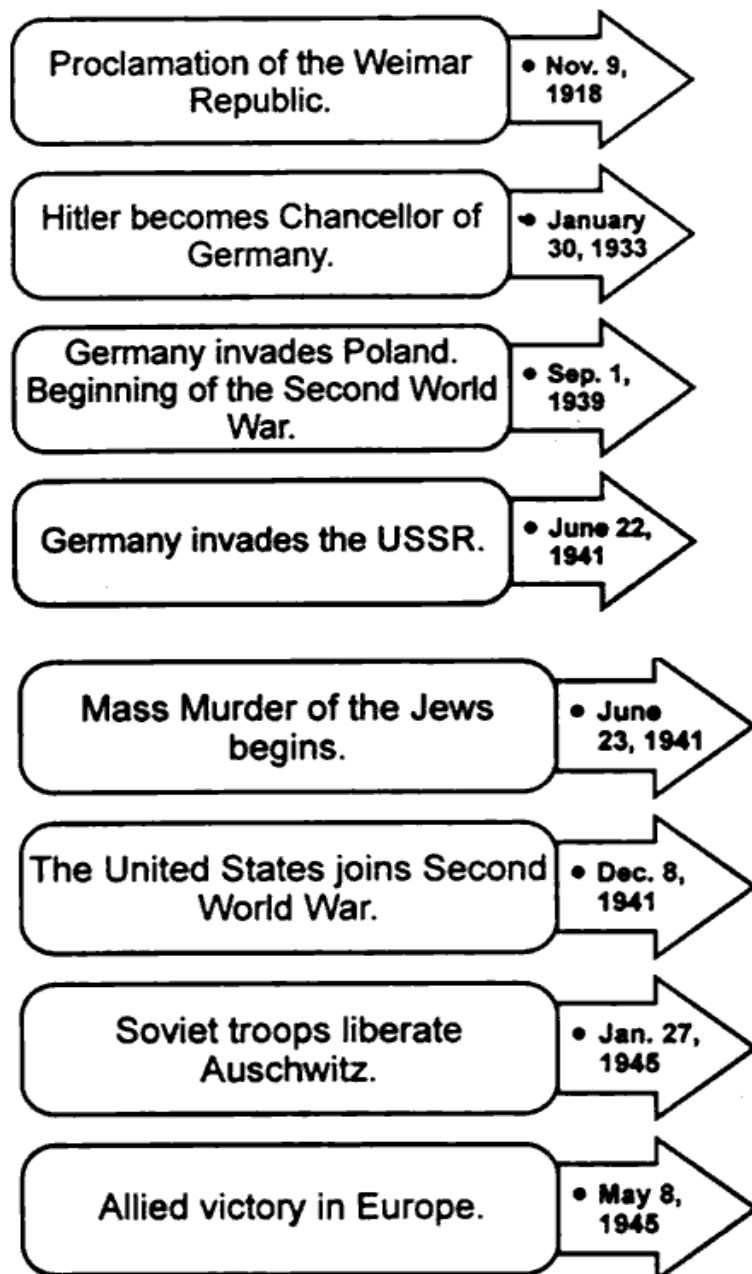
"Due to various reasons, the conduct of first general elections in India became difficult." – Comment.

31. Gender bias is still prevailing in India in some form or another. Discuss the reasons and solutions for this.

OR

While service sector has grown, all service sector activities are not growing equally well. Explain. <https://www.apboardonline.com>

32. Based on the information given below, answer the following questions :

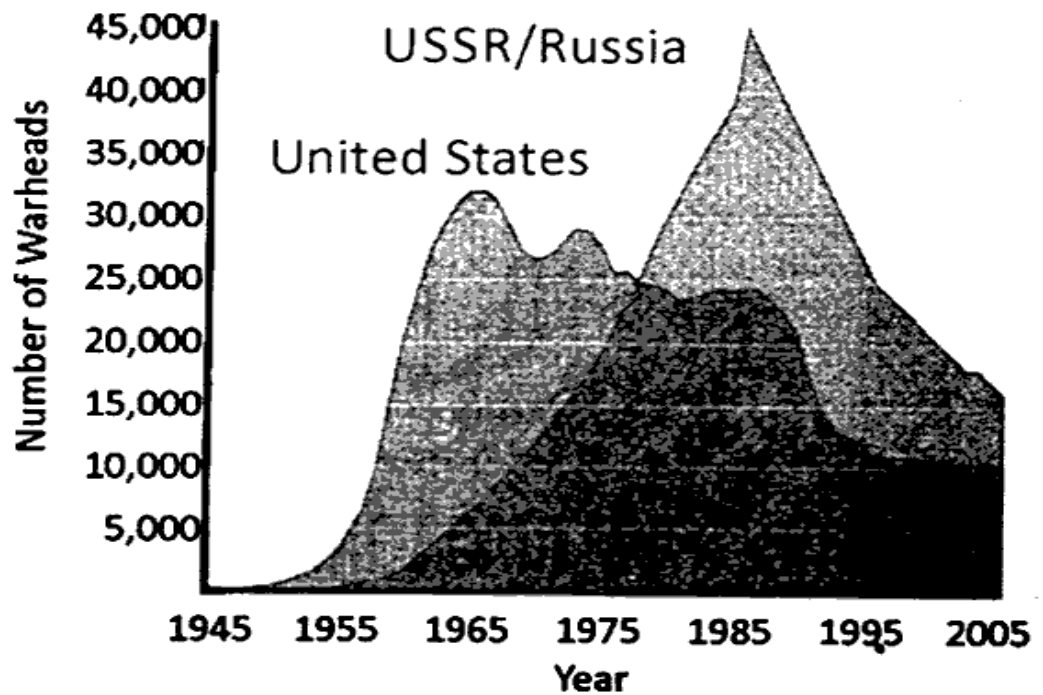


- (i) When and in which country the Weimar republic was established ?
- (ii) What was the year of 'Enabling Act' ? What was the result of it ?
- (iii) Expand U.S.S.R.
- (iv) What was the 'holocaust' ?

OR

<https://www.apboardonline.com>

Analyse the following graph :



US and USSR nuclear stockpiles

33. (A) Locate the following on the outline map of India.

- (1) River Indus
- (2) Mumbai
- (3) Arunachal Pradesh
- (4) Mount Everest

OR

- (5) Lakshadweep
- (6) Deccan Plateau
- (7) Aravali mountains
- (8) Thar desert

(B) Locate the following on the outline map of the world.

- (1) England
- (2) Germany
- (3) Egypt
- (4) China

OR

- (5) Turkey
- (6) Italy
- (7) Brazil
- (8) Portugal

<https://www.apboardonline.com>

Whatsapp @ 9300930012

Send your old paper & get 10/-

अपने पुराने पेपर्स भेजे और 10 रुपये पायें,

Paytm or Google Pay से

<https://www.apboardonline.com>